

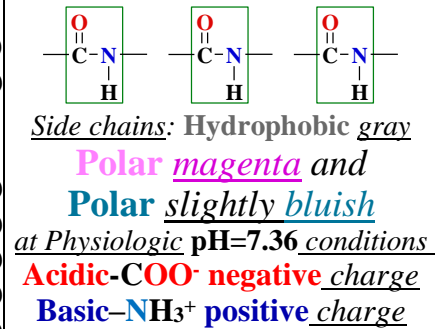
Molecule viewers ChemScape MDL  RasMol  MAGE   Firefox application.

Task htdocsLocal: <http://aris.gusc.lv/ChemFiles/Aquaporins/AquaPorin1-0.htm> **Eye-lens cells**
 William E. C. Harries, David Akhavan, Larry J. W. Miercke, Shahram Khademi, Robert M. Stroud Department of Biochemistry and Biophysics, University of California 2004 Proc. Natl. Acad. Sci. **1YMG.pdb** monomer, 2023 by Aris Kaksis preparation at Riga Stradin's University. **Corey, Pauling, Koltun** the **CPK**

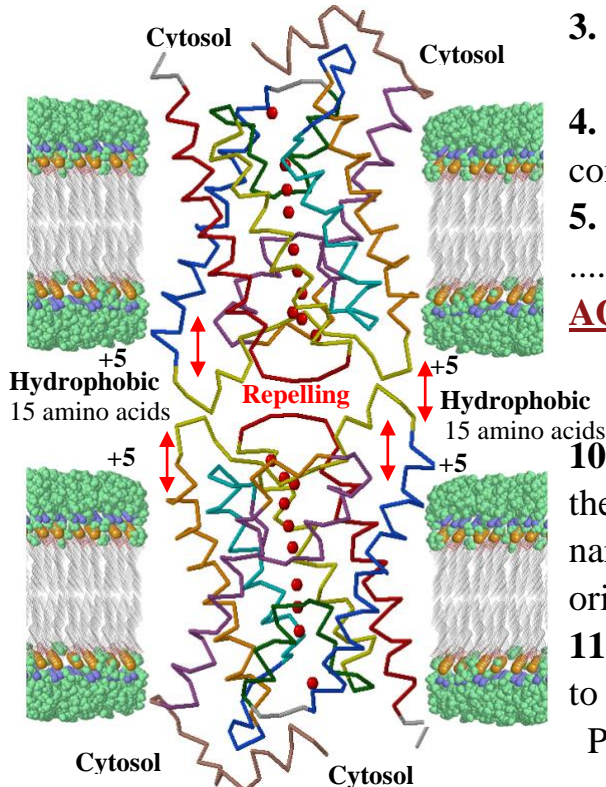
at Display conditions: **Stick** (on Menu **Stripe**) **Ball & Stick** **Spacefill**

Atom Name	Symbol	Color	Valence Number
Carbon	C	Gray lightly or Black	4
Hydrogen	H	White	1
Oxygen	O	Red	2 (donor acceptor ligand up to 4)
Nitrogen	N	Bluish	3 + 1 (donor acceptor ligand up to 4)
Sulfur	S	Yellow	-2, +6
Phosphor	P	Yellow Intensive dark	5 (& 3)
Sodium ion	Na ⁺	Blue	+1 (coordination up to 6)
Magnesium ion	Mg ²⁺	Green	+2 (coordination up to 6)
Calcium ion	Ca ²⁺	Gray Dark	+2 (coordination up to 6)
Iron ion	Fe ²⁺	Yellow Gray	+2 (coordination up to 6)
Iron ion	Fe ³⁺	Yellow Gray	+3 (coordination up to 6)

color scheme 1965 USA patent Protein **Backbone** is **Cα** carbon atoms of amino acids **trace**



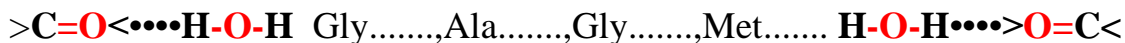
- N-terminus** amino acid is Ser... and **C-terminus** amino acid is Gly..... What is total number of amino acids on primary structure of Aquaporin 0 see 6. page ... ?
- What type secondary structures dose contains the Aquaporin 0(1YMG?....., **no**...
- What number of **alpha helices** constitute Aquaporin 0 polypeptide molecule?**Alpha-helices**
- Are **beta structure** as **sheets** with **beta strands** constituting Aquaporin 0 **eye-lens cells**?



- What number of **alpha helices** constitute Aquaporin 0 polypeptide molecule?**Alpha-helices**
- Are **beta structure** as **sheets** with **beta strands** constituting Aquaporin 0 **eye-lens** and **fiber cells**? **non**...
- Eye-lens** and **fiber cells** junction proteins are ..., ..., ..., ... substrates small neutral molecules transport channels **AQP0**.

- What number oxygen atoms **O** of **water** molecules are present in AQP01YMG.pdb!
- Which three amino acid residues with one oriented into the center line of the channel are responsible for most of the narrowing of the vestibule? Asn....., Thr....., His.... as oriented into the center line .
- At which five amino acid residues **narrow** the channel to 1.99 Å on AQP0 polypeptide chain sequence **backbone**? Phe....., His....., Met....., Ala....., Arg.....

12. Four **backbone** carbonyls >C=O<...H-O-H of successive amino acid residues the canonical AQP0 channel Hydrogen bond acceptors that align **waters** through the channel?



13. Three amino acids **water** molecules ordered in line with three donor Hydrogen bonds with four acceptor bonds? 4 H₂O<...H-N=C< Asn.....,Arg.....,His...

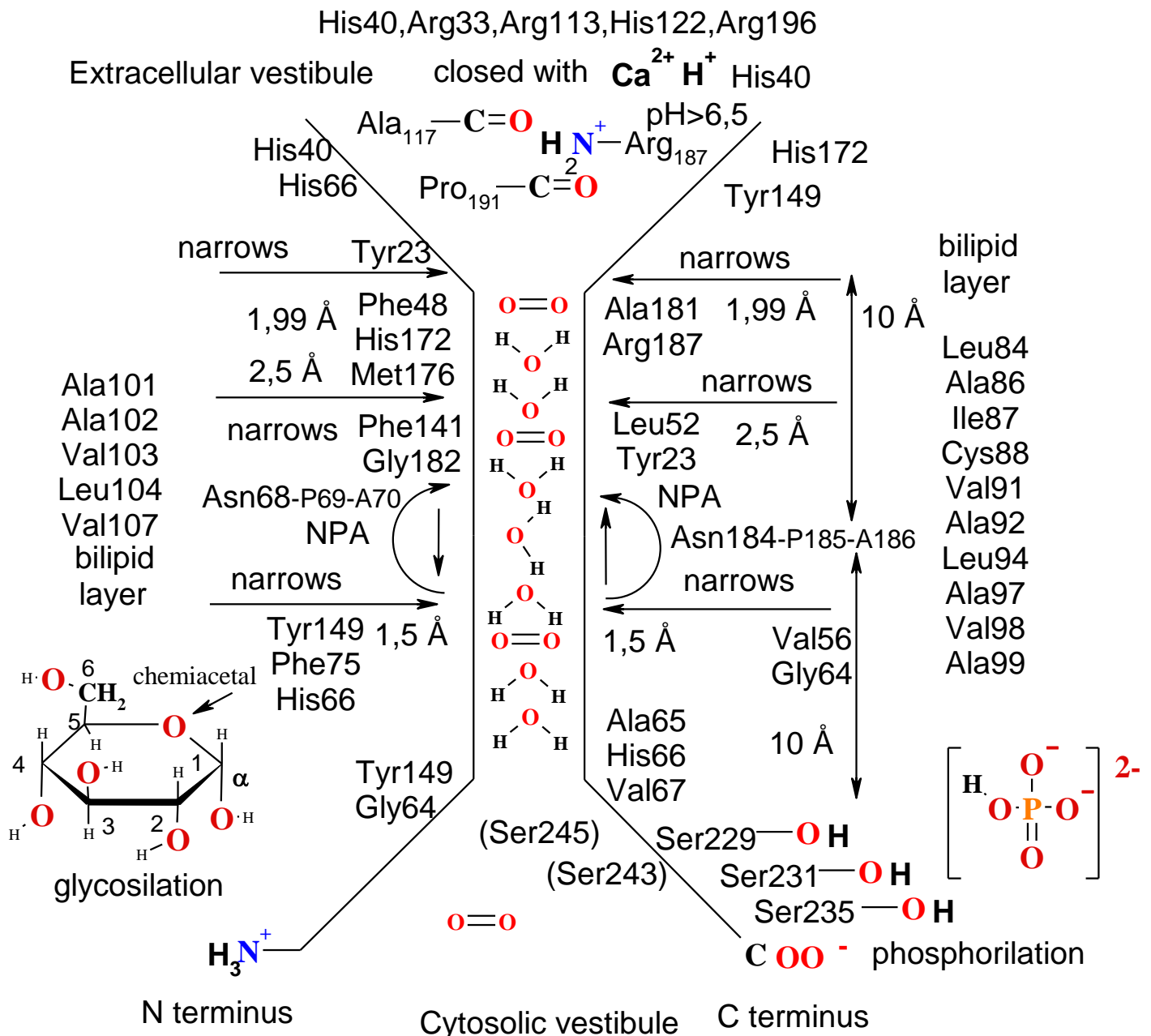
- 14.** Four amino acids constricts the channel diameter to 2.5 Å with side chain directly toward the central axis ? Phe....,Leu....,Leu....,Tyr2....to central axis of the channel
- 15.** Two amino acid side chains just after the Tyr23 constriction are **NPA–NPA signature motifs** that orient the key central **water** molecule what are responsible for the reorientation which so are necessary for prevent and restrict any proton conduction? Asn.....,Asn.....
- 16.** Four cytoplasmic side amino acids of the **NPA signature motifs** line three of **backbone** carbonyl oxygens $>C=O<...H-O-H$ resumes along the wall point directly into the channel and it ends at Tyr149? Gly.....,Ala.....,His.....,Val.....
- 17.** Five amino acids form another constriction that is the channel narrowest region? It accepts close average **radius** of **water pore** sphere **SF** ~ 1.1 Å **H–O–H longitudinal** **1.4** Å and **0.55** Å bent size of dipole with a maximum diameter of 1.5 Å as **water** specific bent-angular structure? Tyr.....,Val.....,Gly.....,His.....,Phe.....
- 18.** What number of **water** molecules the line of eight **backbone** carbonyls $>C=O---H-O-H$ and other channel-lining residues establishes a tight single-file pathway for **water** highlighted molecules in the Aquaporin 0 channel? ...**water** molecules in a tight single-file pathway...
- 19.** What amino acid side chain residue from **backbone** chain of Aquaporin 0 is responsible for the inhibitory effect of **pH** or **Ca²⁺** on **water** transport rates? Therefore, Nemeth-Cahalan and Hall made mutations experiments that changed His-40 to alanine40, aspartate40, or lysine40, and they showed that treatment of oocytes expressing the mutants no longer displayed the **pH-dependent closing** as **pH** was raised from **>6.5**. Reaction of histidines40 in AQP0 with diethylpyrocarbonate (DEPC) removed **pH dependence** and actually increased **water** conductance (restored by histidine40-specific reversal with hydroxylamine), adding support to the case that titration of histidines40 alters conductance! His-..... increases conductance at pH >
- 20.** Five 5 intermolecular forces are known in biochemistry and physiology of proteins? ...
 1.... 2... 3... 4-**S-S**-... 5....
- 21.** What **3** intermolecular forces fold protein chains of AQP0? Call three 3 identified present!
 1.... 2... 3...

22. Put amino acids numbers in 28-Å-long, **cylindrical AQP0 channel** is flanked by shallow vestibules on each end! Channel volume show in the background, with major channel-forming residues amino acid names! The central region show with diameter of <2.5 Å, the regions both side shown with diameter of >2.5 Å and <10 Å long distance from central region center 0! Starting from the extracellular side, the vestibule funnel like diameter of <10 Å with 10 water molecules **HOH** 405, 415, 455, 411, 426, 407, 436, 439, 451, 435, 465 **oxygen** between residues show oriented into the center line. Drawn 7 **HOH**. Center amino acids are responsible for most of the narrowing of the vestibules up to channel narrowest diameter of 1.99 Å, 2,5 Å, 1.5 Å ! Seven charges **-NH₃⁺** and **-COO⁻** both side of membrane prevent conductance of ions!
 hydrophobic trans cellular junction

Gly124,Pro123,Leu121,Phe198,Leu194

Leu39,Pro38,Gly37,Ala35,Gly114 Val112,Ala111,Pro110,Pro109;Val125

positive charged network AQP0 repulses junction AQP0



Download: <http://aris.gusc.lv/06Daugavpils/Research/tgf/AQP0skemS.tgf>

23. Call the cell and organelles localization sites where transport enzymes Aquaporins 0 found!

..... cells as inter cellular or as

between thin fiber..... cells.

24. Two Tyrosines and three Histidines are present down the monomer channel z axis?

Show the positions of Tyrosine residues on **backbone trace** and what

the positions of the Histidines that are close to the channel and vestibules!

Tyr....., Tyr....., His....., His....., His....

25. What three C-terminal **2B6P**.pdb amino acids are Posttranslational modificate and have also been suggested in the regulation of AQP0 activity, as C-terminal chain have been implicated as

regulatory **phosphorylation** sites in human AQP0? What C-terminal mobile helix name and

what three of 24 amino acids 239–263 suit for phosphorilation in structure

of **bAQP0**? **H**.....Ser.....(Ser245), Ser.....(Ser243, Ser240), Ser.....

26. In **Eye-lens** fiber cells 15 residues of amino acids non polar groups hydrophobic interaction forces between bound two aquaporins (AQP0's) create inter membranes cells 16 Å gap

junction. Each contact point integrate energy -10 kJ/mol , if 15 contact points than are -150 kJ/mol .

Leu....., Pro....., Gly....., Ala....., Gly....., Val....., Ala....., Pro.....,

Pro....., Val....., Gly....., Pro....., Leu.....; Phe....., Leu.....

27. Four amino acids as conserved throughout all **AQPs**, alternate conformation located in the central “selectivity filter **SF**” of the channel to contribute channel closure?

with two good hydrogen bonds from Arg>NH...O=C<Pro.....

and from Asn>NH...O=C<Ala.....

28. Five amino acids on surface create positive +5 charge network **repulsing AQP0**

on **Eye-lens** extracellular side. His..., Arg....., Arg....., His....., Arg.....

29. Arg-187, Asn68 3. Conformation in the central “selectivity filter **SF**” make channel closure

with two Hydrogen bonds Arg-187>NH...O=C< un Asn68>NH...O=C< :

>NH...O=C<Pro....., O=C<Phe....., O=C<Asn, O=C<Arg....., O=C<Ser.....;

>NH to O=C<Asn....., O=C<Asn....., O=C<Ala....., O=C<Asn.... and

What two amino acids which are conserved throughout all AQPs Val....., Tyr..... ?

30. What **AQP0** isoelectric point $IEP=pH=pK_{a-vid}$ at physiologic $pH=7,36$? To determine water solution pH with **AQP0** concentration $C=0.00000063=10^{-6,2}M$ ($mol/Litre$)!

21 L- α -Amino Acids proteins polypeptide protolysis pK_a value isoelectric point IEP

At physiologic $pH=7, 36 \pm 0.01$ carboxylic groups **R-COO⁻** negative charged and amino groups **R-NH₃⁺** positive charged. For example, glutamic acid pK_a reference to physiologic pH value smaller as $pK_{aR-COO^-}=4.25 < 7.36$, $pK_{aCOO^-}=2.19 < 7.36$ and for amine is greater as physiologic pH : $9.67=pK_{a-NH_3^+} > 7.36$.

Table shown constants pK_a of four type parallel protolytic equilibria in each amino acid molecule:

acid	\rightleftharpoons base	$+H^+$;	Parallel protolytic equilibria number NpK_a average isoelectric point and constant pK_a value $IEP= pK_a$ is calculated as
1. R-COOH	\rightleftharpoons R-COO⁻	$+H^+$;	$IEP= pK_a= (\sum pK_{aR\ group}+ pK_{a-NH_3^+}+ pK_{a-COOH})/NpK_a$
2. R-NH₃⁺	\rightleftharpoons R-NH₂	$+H^+$;	In <i>Ostwald's dilution law</i> calculate pH of solution
3. Tyr-phenol-OH	\rightleftharpoons Tyr-phenol-O⁻	$+H^+$;	at concentration C logarithm: $pH= \frac{pK_a - \log C}{2} = \dots\dots$
4. Cys-SH	\rightleftharpoons Cys-S⁻	$+H^+$	

Amino acid and protein at isoelectric point value $pH=IEP$ sum of total overall **ion** charge is zero 0 — acidic charge (+) — zero „0” charge **IEP** — in basic medium charge minus (-) — pH scale **-COOH** & **-NH₃⁺** positive charge **-COO⁻** & **-NH₃⁺**..... charge is negative **-COO⁻** & -

Amino Acid		pK_{aCOOH}	$pK_{aNH_3^+}$	$pK_{aRgroup}$
Isoleucine	I	2.36	9.68	
Valine	V	2.32	9.62	
Leucine	L	2.36	9.60	
Phenylalanine	F	1.83	9.13	
Cysteine	C	1.96	10.28	8.18
Methionine	M	2.28	9.21	
Alanine	A	2.34	9.69	
Proline	F	1.99	10.96	
Glycine	G	2.34	9.60	
Threonine	T	2.11	9.62	
Serine	S	2.21	9.15	
Tryptophan	W	2.38	9.39	
Tyrosine	Y	2.20	9.11	10.07
Histidine	H	1.82	9.17	6.00
Aspartate	D	1.88	9.60	3.65
Glutamate	E	2.19	9.67	4.25
Asparagine	N	2.02	8.80	
Glutamine	Q	2.17	9.13	
Lysine	K	2.18	8.95	10.53
Arginine	R	2.17	9.04	12.48

Table 5.3 Reginald H. Garrett, Charles M. Grishman, **Biochemistry**, University of Virginia 1995

Myoglobin IEP=7,36 is neutral zero „0” charged molecule, as IEP=7,36 is equal physiologic $pH_{blood}=7,36$ 1MBO.pdb

Albumin E7G.pdb 7,32=IEP 7 fatty acids small - charge and 7,40=IEP absent 7 fatty acids + positive at $pH=7.36$, but

gamma Globulin IgG1.pdb molecule has positive (+) charge, as at physiologic $pH=7.36$ is greater IEP=7.91.

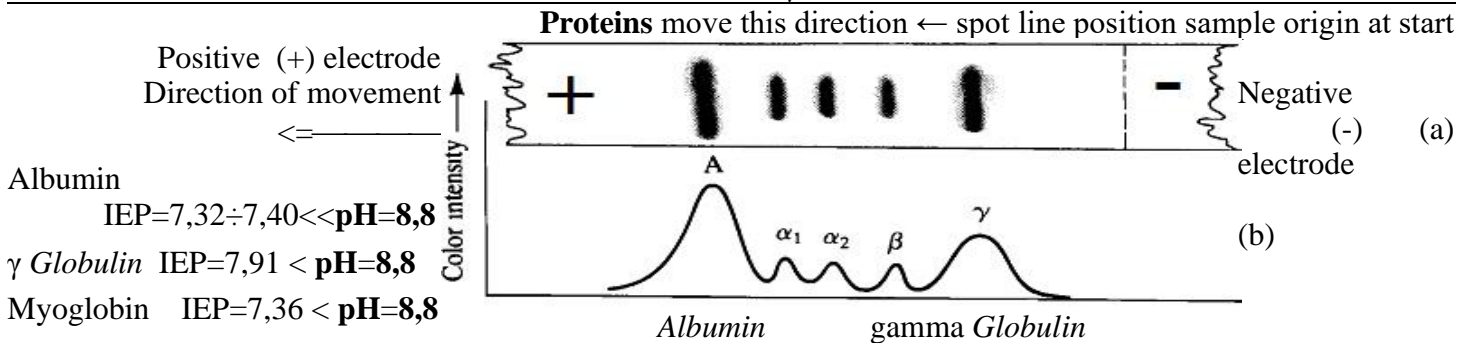
Iso electric point $IEP=pK_a$ as well protolytic constant pK_a calculates one of side residues R constants sum $\sum pK_{aR\ side\ residue}$ plus $pK_{aNterminusNH_3^+}$ and plus $pK_{aCterminusCOO^-}$ sum dividing with number NpK_a of acidic groups in molecule $IEP=pK_a=(\sum pK_{aR\ side\ residue}+ pK_{aNterminus}+ pK_{aCterminus})/NpK_a$

Figure Separation of serum proteins by electrophoresis.

(a) A sample is applied as a narrow line at the origin. After **electrophoresis** at $pH\ 8,8$, the paper is dried and stained.

(b) A plot of color intensity of each spot.

gamma Globulin moves slower as *Albumin*



Seleno cysteine, the 21st L- α -Amino Acid

Seleno cysteine is an L- α -amino acid found in a handful of proteins, including certain **peroxidases** and **reductases** where it participates in the catalysis of electron transfer reactions. As its name implies, a selenium **Se** atom replaces the sulfur **S** of its structural analog, cysteine. The pK_3 of seleno cysteine 5.2 is 3 units lower than that of cysteine 8.18. Since seleno cysteine is inserted into polypeptides during translation, it is commonly referred to as the "21st amino acid." However, like the other 20 genetically encoded amino acids, seleno cysteine is specified by a simple three-letter codon **UGA** (see class 16 week Nucleo proteins tRNA 62 codons).

Lens-specific Aquaporin-0 (AQP0) functions as a specific water pore and forms the thin junctions between fibre cells

<http://aris.gusc.lv/ChemFiles/Aquaporins/1YMGpI.doc> ; <http://aris.gusc.lv/ChemFiles/Aquaporins/1YMGpI.xls>

Sequence of 263 AA Amino Acids in AQP0 molecule 1YMGpI.pdb: 80*3+23=263

10 20 30 40 50 60 70 80
 MWELRSASFWRRAICAEFFASLFYVFFGLGASLRWAPGPLHVLQVALAFGLALATLVQAVGHISGAHVNPVAVTFAFLVGSQ
 MSLLRRAICYMVAQLLGAVAGAAYLYSVTPPAVRGNLALNTLHPGVSVGQATIVEIFLTLQFVLCIFATYDERRNGRLGSV
 ALAVGFSLTLGHLFGMYTGTAGMNPARSFAPAILTRNFTNHVWYVWGPVIGAGLGSLLYDFLLFPRLKSVSERLSILKGS
 RPSESNGQPEVTGEPVELKTQAL

AA pK_{aCOO-} pK_{aNH₃⁺}; pK_{RR}; NchainAA; Nr

M	9,21	1	1
E	4,25	3	2
R	12,48	5	3
R	12,48	11	4
C	8,18	14	5
E	4,25	16	6
Y	10,07	23	7
R	12,48	33	8
H	6	40	9
H	6	61	10
H	6	66	11
R	12,48	85	12
C	8,18	88	13
Y	10,07	89	14
Y	10,07	105	15
R	12,48	113	16
H	6	122	17
E	4,25	134	18
C	8,18	144	19
Y	10,07	149	20
D	3,65	150	21
E	4,25	151	22
R	12,48	152	23
R	12,48	153	24
R	12,48	156	25
H	6	172	26
Y	10,07	177	27
Y	10,07	178	28
R	12,48	187	29
R	12,48	196	30
H	6	201	31
Y	10,07	204	32
Y	10,07	219	33
D	3,65	220	34
R	12,48	226	35
K	10,53	228	36
E	4,25	232	37
R	12,48	233	38
K	10,53	238	39
R	12,48	241	40
E	4,25	244	41
E	4,25	250	42
E	4,25	254	43
E	4,25	257	44
K	10,53	259	45
L	2,63	263	46

In account are present 3 Cysteine residues Cys = pK_{RR} = 8.18;

Sum of 46 pKa values in table

Calculation tasks for Aquaporine 0 molecule AQP0

Protolytic constant pK_a isoelectric point IEP=pK_a calculate of side chains ΣpK_{aRside group}.. pK_{aNterminalNH₃⁺} and pK_{aCterminalCOO-} constants sum divide with number of acid groups NpK_a:

$$IEP=pK_a=(\Sigma pK_{aRside\ group}+ pK_{aNterminal}+ pK_{aCterminal})/NpK_a$$

30.1 Acid groups number in sum NpK_a=44.....+2.....=.....

263 amino acids of them protolytic constants pK_a for side groups 44+2.

N-terminal Methionine M pK_{aNterminal}=9.21 and

C-terminal Leucine L pK_{aCterminal}=2.36

Sum are calculate as

$$\Sigma pK_{aRside\ group}+pK_{aNterminal}+pK_{aCterminal}a=.....$$

30.2 Average acid group constant pK_{mean}=pK_a=IEP **ISOELEKTRIC POINT**

$$NpK_a=44.....+2.....=.....$$

$$IEP=389,69 / 46 =.....$$

At pH value of amino acid and protein on isoelectric point pH=IEP

total charge is zero „0” IEP=pH

0————plus (+)—zero charge „0” —minus charge (-) —→ 14 pH scale

Underline and determine existing: positive (+) or zero charge or negative (-)!

-COOH & -NH₃⁺ positive -COO⁻ & -NH₂ charge negative -COO⁻ & -NH₂

30.3 AQP0 molecule charge sign (+). zero „0” or (-) at physiologic pH=7.36

Underline existing:

-COOH, -NH₃⁺ positive (+) pH=7.36 < IEP=8,52 negative(-) -COO⁻, -NH₂.

30.4 AQP0 molecule charge (+). zero „0” or (-) at **electrophoresis pH 8.8**

Underline existing:

-COOH, -NH₃⁺ positive (+) IEP = 8,52 < pH = 8,8 negative (-) -COO⁻, -NH₂.

30.5 Calculate C=0.00000063=10^{-6,2} M AQP0 solution pH

by *Ostwald dilution law* concentration C in logarithm:

$$pH = \frac{pK_a - \log C}{2} = \frac{8,5228261 - \log 0.00000063}{2} = \frac{8,5228261 + 6,2}{2} = 14,723 / 2 = \dots\dots$$

Attractor 7,36 AQP0 concentration isM.

Furthered follows aquaporin one **AQP1** from erythrocytes